




nombre _____

curso _____

fecha _____

ACTIVIDADES: LECTURA Y REPRESENTACIÓN DE NÚMEROS MENORES A 20

1. Cuente cuántos elementos hay y escriba el número varias veces.


_____
_____
_____
_____

2. Cuente y escriba en el círculo la cantidad de elementos que hay en cada caso:

a

Group a contains five sets of objects, each with a blue circle for counting. The objects are: 10 colored pencils (5 in the top row, 5 in the bottom row), 15 oranges arranged in a 3x5 grid, 6 pink pigs arranged in two rows of three, 10 soccer balls arranged in two rows of five, and 10 pink books arranged in two rows of five.

b

Group b contains five sets of objects, each with a blue circle for counting. The objects are: 6 pink candies arranged in two columns of three, 12 green gifts arranged in three rows of four, 10 yellow ducks arranged in three rows (4, 3, 3), 15 red cars arranged in four rows (4, 4, 4, 3), and 8 blue whales arranged in two rows (4, 4).

3. Dibuje elementos de acuerdo al número que se indica en cada recuadro:



14

20



17

13


4. Cuente cada grupo de figuras y una con su respectivo número:




12	16	18	8	5
----	----	----	---	---



5. Cuente los elementos y una con el número que corresponde:



15



10

16



14

12